

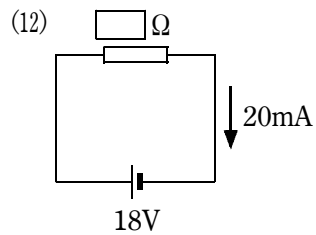
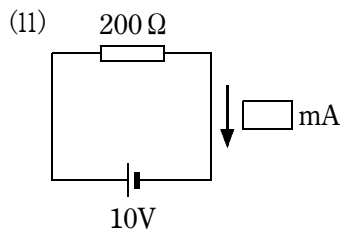
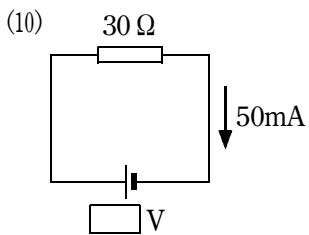
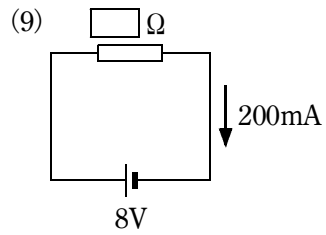
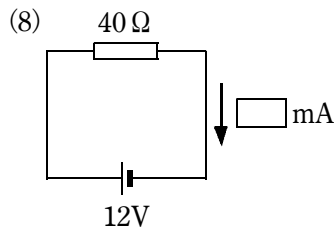
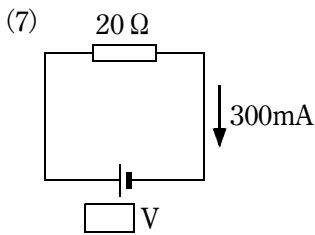
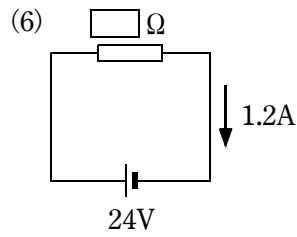
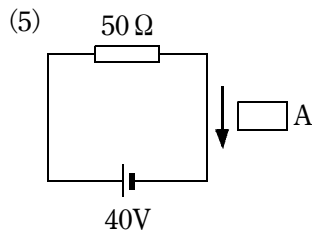
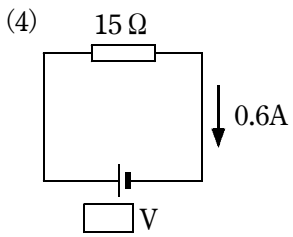
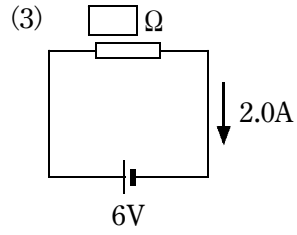
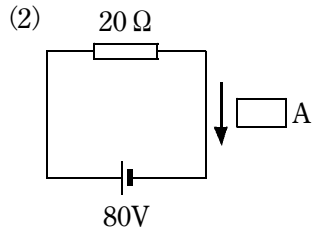
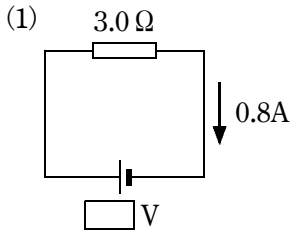
確認テスト

36

名前

得点

① 次の図の にあてはまる数字を、それぞれ答えなさい。



(1)	V _⑧	(2)	A _⑧	(3)	Ω _⑨
(4)	V _⑧	(5)	A _⑧	(6)	Ω _⑨
(7)	V _⑧	(8)	mA _⑧	(9)	Ω _⑨
(10)	V _⑧	(11)	mA _⑧	(12)	Ω _⑨

確認テスト

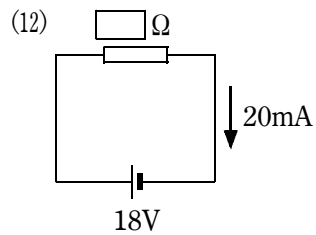
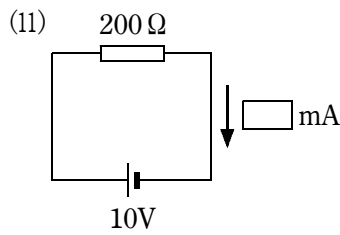
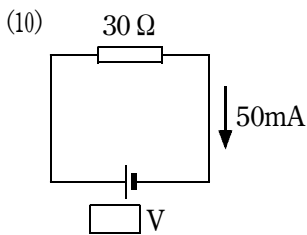
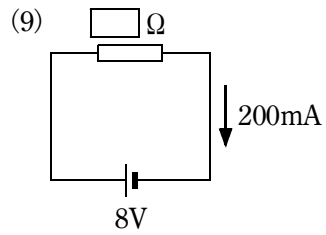
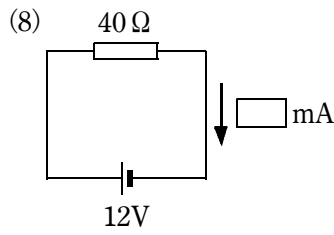
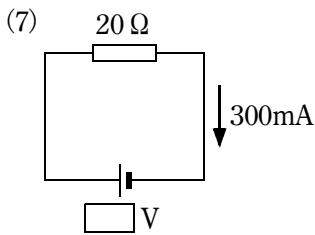
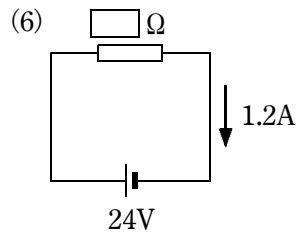
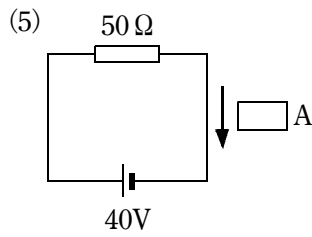
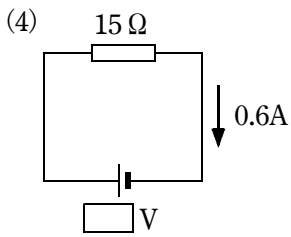
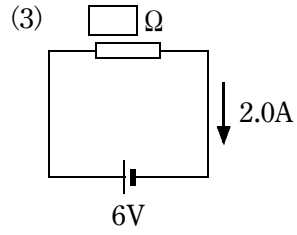
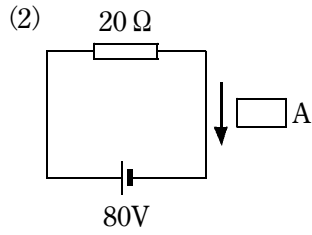
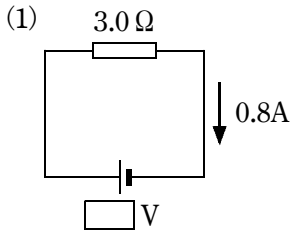
36

名前

解答

得点

① 次の図の にあてはまる数字を、それぞれ答えなさい。



(1)	2.4	V	(2)	4	A	(3)	3	Ω
(4)	9	V	(5)	0.8	A	(6)	20	Ω
(7)	6	V	(8)	300	mA	(9)	40	Ω
(10)	1.5	V	(11)	50	mA	(12)	900	Ω